

Triangle properties

Write next to each triangle the word or words that best describes it from the list below.

equilateral

scalene

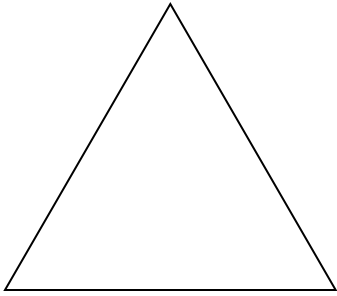
obtuse-angled

isosceles

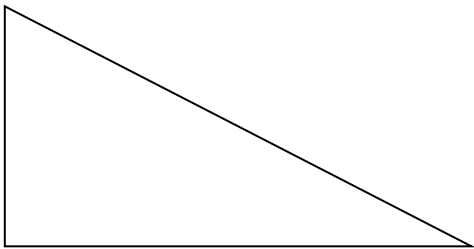
right-angled

acute-angled

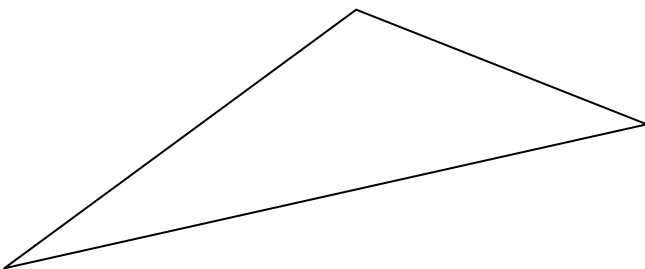
1)



2)



3)



4)

